

Sample Questions from IBPS Clerk Prelims 2020 Bundle PDF

Dear Friends, this is the Special Paid PDF which was made by Our Expert Team for especially for IBPS Clerk Prelims 2020. Here you can check the index page & sample questions of this Special Paid PDF. If you are interest then you can use the link given below to buy it. We assure you that this PDF will definitely useful for the aspirants those who are committed to crack the IBPS Clerk Prelims 2020 can use this PDF.

[Click Here to Buy Our Special Paid Bundle PDF for IBPS Clerk Prelims 2020](#)

Index of Special Paid Bundle PDF for IBPS CLERK Prelims 2020 (Reasoning Ability)

S.no	Topic	No. of Questions	Pages
1	Circle Seating Arrangement	50	05
2	LINEAR Seating Arrangement	50	20
3	Parallel rows Seating Arrangement	50	32
4	Square Seating Arrangement	50	47
5	Rectangle Seating Arrangement	50	72
6	Triangle Seating Arrangement	50	90
7	Unknown Linear	50	104
8	Unknown Circular	50	118
9	Day puzzle	50	130
10	Month and day puzzle	50	147
11	Box/Stack puzzle	50	163
12	Profession/designation puzzle	50	181
13	Year puzzle	50	193
14	Month puzzle	50	209

Sample Questions from IBPS Clerk Prelims 2020 Bundle PDF

15	Floor and Flat puzzle	50	226
16	floor puzzle	50	242
17	Order and Ranking Puzzle	50	263
18	Random Puzzle	50	275
19	Input output	50	296
20	Coding Decoding (even odd type)	50	309
21	Direction	50	327
22	Blood relation	50	340
23	Inequality	50	351
24	Syllogism	50	364
25	Alpha numeric Series	50	381
26	Coding Decoding letter code	50	397
27	Alphabet series	50	408
28	Coding decoding Chinese code	50	424
29	Numerical Series	50	436
30	Alphabetical order (Forward and backward)	50	448
31	Data Sufficiency	50	462
32	Odd one out	50	488
33	Meaningful words	50	498
TOTAL NO. OF QUESTIONS		1650	

Sample Questions from IBPS Clerk Prelims 2020 Bundle PDF

Index of Special Paid Bundle PDF for IBPS CLERK Prelims 2020 (Aptitude)

S.no	Topic	No. of Questions	Pages
1	Simplification	50	510
2	Approximation	50	518
3	Quadratic Equation	50	528
4	Missing number	50	544
5	Wrong number	50	555
6	Table DI	50	565
7	Pie DI	50	581
8	Line DI	50	598
9	Bar DI	50	613
10	Caselets	50	628
11	Ages	50	646
12	Partnership	50	664
13	Simple & Compound Interest	50	681
14	Profit and Loss	50	697
15	Time Speed Distance	50	712
16	Boats Stream	50	727
17	Probability	50	742
18	Time & Work	50	756
19	Data Sufficiency	50	773
20	Quantity I & Quantity II	50	788
	TOTAL NO. OF QUESTIONS	1000	

**Sample Questions from IBPS Clerk Prelims 2020 Bundle PDF****Index of Special Paid Bundle PDF for IBPS CLERK Prelims 2020 (English Language)**

Sl.no	Topic	No. of Questions	Pages
1	Misplet Word	50	805
2	Single fillers	50	814
3	Double fillers	50	830
4	Error Spotting	50	847
5	Usage of words	50	858
6	Identifying correct sentence	50	873
7	Cloze test	50	900
8	Sentence Correction/ Improvement	50	917
9	Sentence Completion	50	936
10	Rearrange the word	50	953
11	Word replacement	50	968
12	Pick up the correct Starter /connector	50	981
13	Match the column	50	995
14	Sentence rearrangement	50	1021
15	Phrasal replacement	50	1035
16	Reading Comprehension	50	1050
17	Jumbled Sentence	50	1069
	TOTAL NO. OF QUESTIONS		850

Sample Questions from IBPS Clerk Prelims 2020 Bundle PDF

Sample Questions from Reasoning Ability:

Floor and Flat puzzle:

Direction (1-5): Study the following information carefully and answer the following questions.

Eight person P, Q, R, S, T, U, V and W are living in a four-storey building such that the ground floor is numbered as 1 and continued so till the topmost floor is numbered as 4.

Note1: In the building, there are two groups of flats X and Y on each floor such that Flat X is to the east of Flat Y.

Note2: Floor number 2 of flat X is immediately above floor number 1 of flat X and so on.

Two persons live between P and T, both of them live in the same flat. Only one person lives between Q and U, who lives east of P. V lives either immediately above or immediately below Q. One person lives between T and S, who lives west of V. R lives North-west of W. both Q and U live in the same flat.

1) Who among the following person lives west of W?

- A. The one who lives immediately above S
- B. P
- C. The one who lives immediately below R
- D.S
- E. None of these

2) R lives on which floor and in which flat respectively?

- A.3rd floor, flat X
- B.2nd floor, Flat X
- C.4th floor, Flat Y
- D.2nd floor, Flat Y
- E.3rd floor, Flat Y

3) Who among the following person lives immediately above V?

- A.R
- B. The one who lives west of Q

C.S

D. The one who lives east of P

E. None of these

4) Who among the following pair of persons live on the topmost floor?

A.SR

B.QW

C.PS

D.UV

E.PU

5) How many persons live between P and S?

A.1

B.2

C. None

D.3

E. None of these

Solution (1-5):

1. Answer: C

2. Answer: D

Sample Questions from IBPS Clerk Prelims 2020 Bundle PDF

3. Answer: D

4. Answer: E

5. Answer: C

Explanation

From the given statements, two persons live between P and T both of them live in the same flat.

Only one person lives between Q and U, who lives east of P, both Q and U live in the same flat.

Floor	Case 1		Case 2	
	Flat Y	Flat X	Flat Y	Flat X
4	P	U	T	
3				Q
2		Q		
1	T		P	U

V lives either immediately above or immediately below Q.

One person lives between T and S, who lives west of V.

R lives North-west of W, we cannot place R in case 2 so case 2 will be eliminated.

Floor	Case 1		Case 2	
	Flat Y	Flat X	Flat Y	Flat X
4	P	U	T	
3	S	V		Q
2	R	Q	S	V
1	T	W	P	U

So the final arrangement is-

Sample Questions from IBPS Clerk Prelims 2020 Bundle PDF

Floor	Flat Y	Flat X
4	P	U
3	S	V
2	R	Q
1	T	W

Data Sufficiency:

6). What is the code for "Yellow"?

Statement1: "Red Blue Yellow" coded as "ad bd cd". "Yellow Green orange" coded as "ed cd ld". "Green Blue" coded as "bd ld"

Statement2: "Green Red Black" coded as "md ld vd". "Green Black Yellow" coded as "md ld fd".

- a) Statement I sufficient
- b) Statement II sufficient
- c) **Either I or II sufficient**
- d) Neither statement I nor statement II sufficient
- e) both I and II together sufficient

6. Answer: c

Solution

From the above statement1, "Yellow" is coded as "cd"

From the above statement2, "Yellow" is coded as "fd"

BLOOD RELATION:

Direction (7-9): Study the following information carefully and answer the below questions.

There are eight members in the family with three generations. Three couples are there in the family. S is the father of W, who is the mother of D. E is the granddaughter of L, who is the mother-in-law of M. C is the brother-in-law of O who is the sister of W. D is the brother of E, who is the daughter of W.

7) How is L related to W?

- A. Father
- B. Father-in-law
- C. Mother
- D. Mother-in-law

Sample Questions from IBPS Clerk Prelims 2020 Bundle PDF

E. None of these

8) Four of the following are alike in a certain way so form a group, which of the following does not belong to that group?

A.S

B.M

C.C

D.L

E.D

9) How is E related to O?

A. Son

B. Daughter

C. Nephew

D. Niece

E. None of these

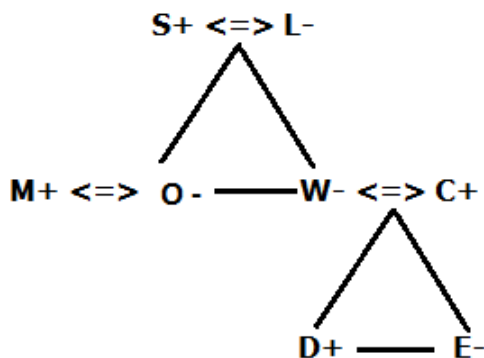
Direction (7-9):

7. Answer: C

8. Answer: D

9. Answer: D

Explanation



Syllogism:

10. Statements:

Some Red are Blue.

Only a few White are Red.

Sample Questions from IBPS Clerk Prelims 2020 Bundle PDF

All Red are Brown.

Conclusion:

I. Some Brown are White.

II. All Red are Blue.

a) Only I follows

b) Only II follows

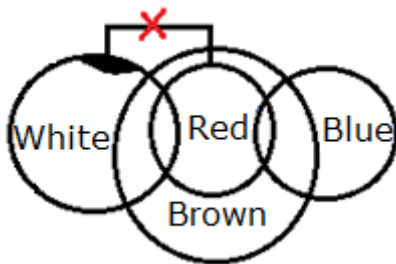
c) Either I or II follows

d) Neither I nor II follows

e) Both I and II follow

10. Answer: a) Only I follows

Solution:



Coding Decoding:

11. Answer the following questions based on the information given below

Letters in the first row, followed by their Digit/Symbol code in the next row:

Letter/Number	A	G	Z	1	T	P	4	5	F	C	7	U	3	O
Code	@	*	&	!	\$	^	{	+	=	?	}	>	\	<

(i) If more than two vowels are in the group, then code of all the vowels will be \$.

(ii) If second element is even digit, then code of the first element will be same as the code of last element.

(iii) If only one consonant is in the group, then code of the consonant will be same as the code of second last element.

* More than one condition can be applied on a group of letters.

11) What would be the code of the element 'ZAP4F'?

a. &@^}=

b. &@^{=

Sample Questions from IBPS Clerk Prelims 2020 Bundle PDF

- c. &@<{=
 d. &@>{=
 e. None of these

Solution 11:

Letter/Number	A	G	Z	1	T	P	4	5	F	C	7	U	3	O
Code	@	*	&	!	\$	^	{	+	=	?	}	>	\	<

The code of the element 'ZAP4F' is '&@^ {='

No condition will be applied in this element

Direction (12-13): Study the following information carefully and answer the below questions.

'Spot gentle post window sheep' is coded as 'abc rac uvw wow def'

'Cattle sheep gentle paper zebra' is coded as 'abc lmn ghi uvw opq'

'Gentle mobile spot paper post' is coded as 'rac jkl ghi uvw def'

'Cattle window post sheep' is coded as 'def lmn wow abc'

Note: All the codes are in three letter format

12) What is the code for "post"?

- A.abc
 B.def
 C.rac
 D.ghi
 E.lmn

13) What is the code for "zebra"?

- A.opq
 B. Wow
 C.uvw
 D.jkl
 E. None of these

Solution :

Sample Questions from IBPS Clerk Prelims 2020 Bundle PDF

Word	Code	Word	Code
Spot	Rac	Gentle	Uvw
Post	Def	Window	Wow
Sheep	Abc	Cattle	Lmn
Paper	Ghi	Zebra	Opq
Mobile	jkl		

12. Answer: B

13. Answer: A

Order and Ranking Puzzle:

Directions (14-15): Study the following information carefully and answer the below questions.

Fives friends – Ahmed, Chris, Josh, Sam and Shaw are having a different number of toffees. Shaw has more toffees than Sam, who have more toffees than Chris. Ahmed has less toffees than Josh but more toffees than Shaw. Sam has 23 toffees which are 18 less than the one who has the second-highest number of toffees.

14) What are the possible toffees does Shaw have?

- (a) 42
- (b) 22
- (c) 37
- (d) Either a or b
- (e) Either a or c

15) The sum of the toffees having by Josh and Sam are 75, what is the difference between the toffees having by Josh and Ahmed?

- (a) 14
- (b) 11
- (c) 24
- (d) 9
- (e) None of these

Solution :

Directions (14-15):

Sample Questions from IBPS Clerk Prelims 2020 Bundle PDF

No	Persons	Toffees
1	Josh	
2	Ahmed	41
3	Shaw	
4	Sam	23
5	Chris	

14) Answer: C

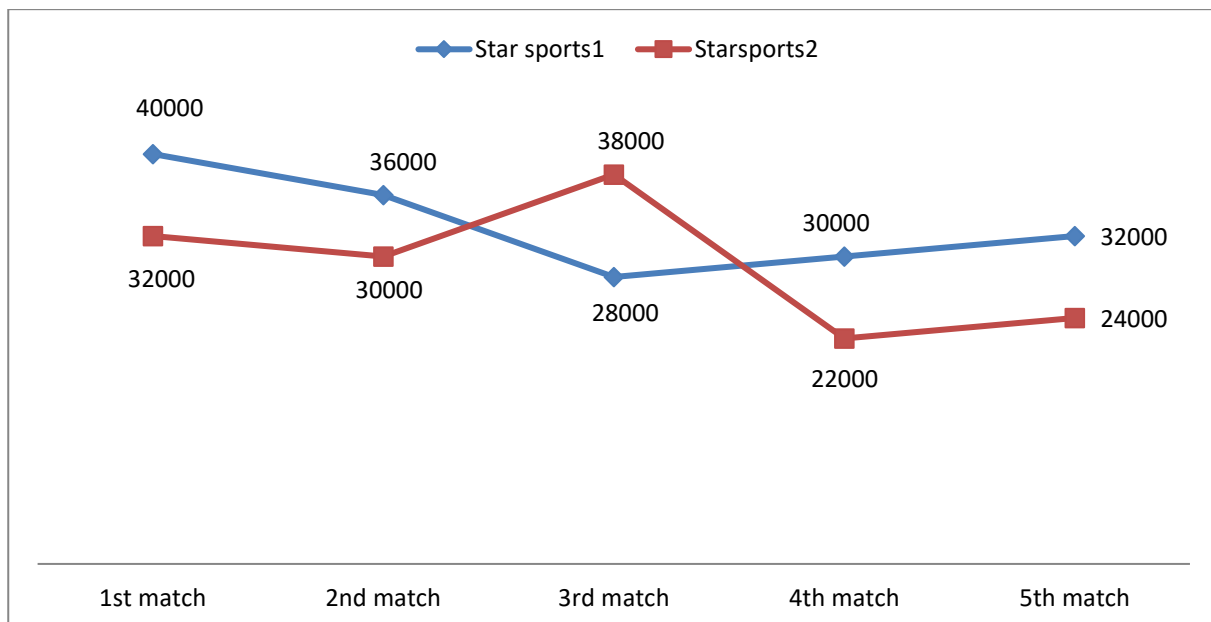
15) Answer: B

Sample Questions from Quantitative Aptitude:

Line DI

Direction (1-5) Study the graphs carefully and answer the question.

Line graph shows the number of viewers in Star sports1 and Star sports2 during five IPL match.



1. Find the ratio between total viewers (both channel) of 1st match and the total viewers of 2nd match?

a.2:3

b.85:44

Sample Questions from IBPS Clerk Prelims 2020 Bundle PDF

c.65:69

d.65:23

e.12:11

Answer e

Total viewers in 1st match is =40000+32000=72000

Total viewers in 2nd match is=36000+30000=66000

So required ratio is =72000:66000=12:11

2. Viewers of 3rd match on starsports1 are what percent less than the viewers of 5th match on starsports1?

a.20%

b.25%

c.10%

d.12.5%

e.2%

Answer b

Viewer in 3rd match on starsports1 is 28000

Viewer in 5th match on starsports1 is 32000

So required percent is =(40000/32000)*100=25%

3. Average number viewers on starsports1 in 1st and 3rd match together is what percent of total viewers on starsports2 in 2nd match?

a.114%

b.102%

c.113.33%

d.152%

e.178%

Answer c

Total viewers in starsports1 in 1st and 3rd match is =40000+28000=68000

So average viewer is =68000/2=34000

Sample Questions from IBPS Clerk Prelims 2020 Bundle PDF

Total viewers in starsports2 in 2nd match is 30000

So required percentage is = $(34000/30000)*100=113.33\%$

4. Find the difference between total number of viewers on starsports1 and starsports2 in all the matches together?

- a.32000
- b.20000
- c.78000
- d.96000
- e.41000

Answer b

Total viewers on starsports1 is

$$=40000+36000+28000+30000+32000=166000$$

Total viewers on starsports2 is

$$=32000+30000+38000+22000+24000=146000$$

So required difference is =166000-146000=20000

5. Total 1st match viewers is what percent of total 5th match viewers?

- a.128.57%
- b.120%
- c.142%
- d.148%
- e.120.23%

Answer a

Total viewers in 1st match is =40000+32000=72000

Total viewers in 5th match is =24000+32000=56000

So required percentage is

$$= (72000/56000)*100=128.57\%$$

Missing Number

6) 123, 132, 168, 249, 393,?

Sample Questions from IBPS Clerk Prelims 2020 Bundle PDF

- a) 682
- b) 673
- c) 618
- d) 693
- e) 503

Answer: C

123	132	168	249	393	618
9	36	81	144	225	
3^2	6^2	9^2	12^2	15^2	

7) 324, 336, 360, 408, 480, ?

- a) 529
- b) 544
- c) 539
- d) 576
- e) None of the above

Answer: D

324	336	360	408	480	576
12	24	48	72	96	
$1*12$	$2*12$	$4*12$	$6*12$	$8*12$	

Simplification

8. 40% of 1125 – 30 = ? + 24% of 500

- a) 200
- b) 270
- c) 300
- d) 280
- e) 240

Answer: B)

$$\sqrt{676 + ?} = 2 \frac{5}{6} \text{ of } 96$$

Sample Questions from IBPS Clerk Prelims 2020 Bundle PDF

$$? = 17 \times 96/6 - 26$$

$$? = 272 - 26$$

$$? = 246$$

9. $34/28 + 76/28 + 390/6 + 86/28 = ?$

a) 72

b) 77

c) 71

d) 78

e) 76

Answer: A)

$$34/28 + 76/28 + 390/6 + 86/28 = ?$$

$$196/28 + 65 = ?$$

$$7 + 65 = ?$$

$$72 = ?$$

Simple Interest

10. Manisha borrowed Rs.8000 from Mala for his education. What is the total amount returned at the end of 45 months at the rate of simple interest of 20%?

A.Rs.12000

B.Rs.13000

C.Rs.14000

D.Rs.15000

E.None of these

Answer: C

$$SI = P * N * R/100$$

$$SI = 8000 * 20 * 45/1200 = \text{Rs.}6000$$

$$\text{Amount} = 6000 + 8000 = \text{Rs.}14000$$

Profit and Loss

11. A shopkeeper has three different mobiles Nokia, Samsung and Redmi and the total price of all the mobiles together is Rs.109000. The ratio of the cost price of Nokia to Samsung is 5:7 and the ratio of the cost price of Redmi to Nokia is 5:7. Find the cost price of Nokia?

Sample Questions from IBPS Clerk Prelims 2020 Bundle PDF

A.Rs.35000

B.Rs.36000

C.Rs.42000

D.Rs.28000

E.Rs.56000

Answer: A

$$N + S + R = 109000$$

$$\text{Ratio of the CP of Nokia and Samsung} = 5:7$$

$$\text{Ratio of the CP of Redmi and Nokia} = 5:7$$

$$\text{Ratio of the CP of Nokia, Samsung and Redmi} = 35:49:25$$

$$\text{CP of Nokia} = 35/109 * 109000$$

$$= 35000$$

Distance, Speed and Time

12. A bike travels with a speed of 40 km/h, its speed is increased by 10 km/h after every 1.5 hours. Find the time taken by bike to cover a distance of 300 km.

A.29/7 hours

B.31/7 hours

C.36/7 hours

D.37/7 hours

E.None of these

Answer: E

$$\text{Distance covered by bike in 1.5 hours} = 40 \times 1.5 = 60 \text{ km}$$

$$\text{Distance covered in 3 hours} = 60 + 50 \times 1.5 = 135 \text{ km}$$

$$\text{Distance travelled in 4.5 hours} = 135 + 60 \times 1.5 = 225 \text{ km}$$

$$\text{Rest of the distance covered by bike with speed of 70 km/h}$$

$$= (300 - 225)/70 = 15/14 \text{ hours}$$

$$\text{Total time} = 4.5 + 15/14 = 39/7 \text{ hours}$$

Probability

13) A bag contains 3yellow, 5pink and 4 white balls. If two balls are drawn at random, then what is the probability that balls are either yellow or pink?

Sample Questions from IBPS Clerk Prelims 2020 Bundle PDF

- a) 13/66
- b) 2/11
- c) 1/5
- d) 7/33
- e) None of these

Answer: A

$$\begin{aligned}\text{Required probability} &= (3C_2 + 5C_2)/12C_2 \\ &= ((3*2)+(5*4))/12*11 \\ &= 13/66\end{aligned}$$

Time and Work

14. A and B together can complete the work in 20 days and B and C together can complete the work in 60 days and C alone complete the work in 120 days. In how many days A and C together can complete the work?

- A.20 days
- B.24 days
- C.30 days
- D.36 days
- E.None of these

Answer: A

$$\begin{aligned}\text{A + B together can complete the work} &= 20 \text{ days} \\ \text{B + C together can complete the work} &= 60 \text{ days} \\ \text{C alone complete the work} &= 120 \text{ days} \\ \text{B alone complete the work} &= 1/60 - 1/120 = 1/120 \\ \text{A alone complete the work} &= 1/20 - 1/120 \\ &= 1/24 \\ \text{A + C together can complete work} &= 1/24 + 1/120 \\ &= 1/20\end{aligned}$$

Data Sufficiency

15. Find the cost price of the product?

Statement I – There is 20% profit if the

Sample Questions from IBPS Clerk Prelims 2020 Bundle PDF

Product sells at 384.

Statement II – There is 25% loss if the product sells at 240.

- a) Only Statement I alone.
- b) Only Statement II alone.
- c) Both Statements I and II together.
- d) Neither Statement I nor II is sufficient.
- e) Either Statement I or II.

Answer e

In Statement I, selling price and profit percentage is given so from statement 1 we can calculate the cost price of the products.

In Statement II, selling price and loss percentage is given, from that we can calculate the cost price of the product.

So answer is Either Statement I or II.

Sample Questions from English Language:

Misplet Word:

1. Freight rates for dry bulk and container ships, **carriers** of most of the world's raw materials and finished goods, have **plunged** over the last six months in the latest sign the global economy is slowing **significantly**.

- A. Freight
- B. Carriers
- C. Plunged
- D. Significantly
- E. All are correct

2. India has questioned the **rush** at the UN to declare climate change an international **security** issue, potentially giving the Security **Council** the right to take action on it, and pointed to the **pitfalls** in the approach.

- F. Rush
- G. Security
- H. Council
- I. Pitfalls
- J. All are correct

Solution :

Sample Questions from IBPS Clerk Prelims 2020 Bundle PDF

1. The correct word is D - **Significantly**
2. The correct word is D - **Pitfalls**

Double fillers:

3. The Director General of Civil Aviation (DGCA) has asked international airlines to consider _____ ticket cancellation and reschedule charges or look at providing any other _____, amid the coronavirus outbreak.
 - a) Product, Life
 - b) Allow, Infection
 - c) Waiving, Incentive
 - d) Vibrate, Allocation
 - e) Function, Death
4. The _____ expansion of Chinese smartphone-makers in India has helped the country _____ the US to become the second-largest smartphone market in the world.
 - a) Angry, Leading
 - b) Purpose, Calculation
 - c) Aggressive, Dethrone
 - d) Worrying, Following
 - e) Down, Instinct

Solution :

3. The correct answer is **C** – Waiving, Incentive

Meaning: Waiving - , Do without or cease to hold or adhere to, Allocation - The act of distributing by allotting or apportioning; distribution according to a plan, Incentive - An additional payment (or other remuneration) to employees as a means of increasing output

The Director General of Civil Aviation (DGCA) has asked international airlines to consider **waiving** ticket cancellation and reschedule charges or look at providing any other **incentive**, amid the coronavirus outbreak.

4. The correct answer is **C** – Aggressive, Dethrone

Meaning: Dethrone - Remove a monarch from the throne, Instinct - Inborn pattern of behaviour often responsive to specific stimuli

The **aggressive** expansion of Chinese smartphone-makers in India has helped the country **dethrone** the US to become the second-largest smartphone market in the world.

Sample Questions from IBPS Clerk Prelims 2020 Bundle PDF

Error Spotting

5)

- A) The automobile industry, the first
- B) to feel the affect of an economic slowdown
- C) has seen sales falling over
- D) the last two months
- E) No error

6)

- A) For people who admire
- B) the world's oldest democracy
- C) the developments in the United States
- D) have caused considerable concern.
- E) No error

Solution :

5) Answer: B

The automobile industry, the first to feel the **effect** of an economic slowdown, has seen sales falling over the last two months.

Affect is usually a verb, and it means to impact or change. **Effect** is usually a noun; an effect is the result of a change.

Effect of an economic slowdown → Result of the slowdown

6) Answer: E

For people who admire the world's oldest democracy the developments in the United States have caused considerable concern.

No error.

Usage of words

7. Accord

- (I) The club members voted with one **accord** to raise the dues.
- (II) Such an act would not be in **accord** with our policy.
- (III) What he has just said does not **accord** with the views of the majority.
 - a. Both I and III
 - b. Only I

Sample Questions from IBPS Clerk Prelims 2020 Bundle PDF

- c. All are correct
- d. Only III
- e. None of these

8. Wage

- (I) The government would not intervene in private-sector **wage** bargaining.
- (II) The employers and strikers had deadlocked over the **waged**.
- (III) The minimum **wage** was set at £ 3.20 an hour.
- a. All are correct
 - b. Only II
 - c. Both I and III
 - d. Only III
 - e. None of these

Solution :

7. The correct answer is **c – All are correct**

8. The correct answer is **c – Both I and III**

The corrected sentence is –

(II) The employers and strikers had deadlocked over the wage.

Cloze test :

9. In the following paragraph there are five blanks. Find the best word that fit the blank from the given options.

Niigata is famous for its heavy snowfalls during the winter month. When one -----(A)----- into the mountains of Murakami during winter, thick snow -----(B)----- the landscape The natural scenery appears -----(C)-----, since the never-ending snowfall immediately covers -----(D)----- left by human footprints with a fresh layer of snow. The buildings of Takane Village, their inhabitants themselves residing -----(E)----- deep layers of snow, blend into these these beautiful winter scenes.

9. Which of the following would fit the blank A?

- A) enters
- B) reaches
- C) ventures
- D) climbs
- E) None of the above

Sample Questions from IBPS Clerk Prelims 2020 Bundle PDF

Answer: C

When one **ventures into the mountains** of Murakami during winter, thick snow covers the landscape.

Venture - A trip or a set amount of travelling; journey, adventure, campaign

The blank needs a verb which expresses the start of a journey. But post the blank preposition 'into' is there. So we need to choose the verb accordingly. Climb won't take 'into' preposition after that. Hence it is rejected. Option A and B are eliminated for the reason they will not fit the blank contextually.

Match the column

10.

A) Every morning, a four-page digest of news told us of a virus in faraway Wuhan,	D) but that barely translated to this unpeopled landscape with its 360-degree horizons.
B) Of course, there's a special clarity in sailing through	E) a noiseless world where there's often no sign of human habitation.
C) And nearly all my fellow passengers seemed as liberated	F) as I by the fact that phone calls were almost impossible on the ship and the internet punitively slow.

A) A-E, B-D

B) B-F, C-D

C) B-E, C-F

D) A-F, B-D

E) None of these

11.

COLUMN- I	COLUMN-II
A) Promoting health and well-being is among	D) which is sometimes used interchangeably.
B) Health promotion is more relevant today than ever in	E) the core competencies of primary care.

Sample Questions from IBPS Clerk Prelims 2020 Bundle PDF

C) Health education and health promotion are two terms	F) addressing public health problems.
--	---------------------------------------

- A) A-E, B-F, C-D
B) A-F, B-D, C-E
C) A-F, C-D
D) A-E, B-F
E) None of the above is correct match

Solution :

10. Answer: C

From the given options only C-F, B-E is matched and make a meaningful sentence. The correct answer after matching will be

(B-E): Of course, there's a special clarity in sailing through a noiseless world where there's often no sign of human habitation.

(C-F): And nearly all my fellow passengers seemed as liberated as I by the fact that phone calls were almost impossible on the ship and the internet punitively slow.

Option A: A-E, B-D- is incorrect because it does not make any meaningful sentence.

Option B: B-F, C-D- is incorrect because it does not make any meaningful sentence.

Option D: A-F, B-D- is incorrect because it does not make any meaningful sentence.

11. Answer: D

Correct sentences are

Promoting health and well-being is among the core competencies of primary care.

Health promotion is more relevant today than ever in addressing public health problems.

Health education and health promotion are two terms which are sometimes used interchangeably.

C-D match is incorrect grammatically. "are" is the correct verb in place of "is" in the D as the subject (Health education and health promotion) is plural.

Sentence rearrangement

Directions (12-13): In the following questions, a grammatically correct and meaningful sentence is given which is divided into four parts, namely (A),(B),(C) and (D) You have to arrange the four parts to make a contextually

Sample Questions from IBPS Clerk Prelims 2020 Bundle PDF

and grammatically meaningful sentence. If no such rearrangement is possible mark (e) as your answer i.e. 'No rearrangement required'.

12)

- (A) he explained to the king that the gunny
- (B) bag full of grains was the real gold
- (C) that the earth could give, which
- (D) he had grown with lots of hard work

- (a) ADCB
- (b) BACD
- (c) CDBA
- (d) DABC
- (e) No rearrangement required

13)

- (A) was stealing fruits
- (B) one day Bhima made Duryodhana
- (C) fall from a tree
- (D) from which Duryodhana

- (a) DACB
- (b) ABDC
- (c) CBDA
- (d) BCDA
- (e) No rearrangement is required

Solution :

12. Answer : E

the sentence requires no rearrangement.

13. Answer: D

The correct rearrangement of the parts of statement will be “BCDA”

Phrasal replacement

14. Freeing banks from government control would allow many desirable reforms for taking place.

- a) reforms to take place

Sample Questions from IBPS Clerk Prelims 2020 Bundle PDF

- b) reforms for take place
- c) reforms in take place
- d) reforms to taking place
- e) no improvement

15. Starting as early as Standard I, curriculum expecting move at a fast pace.

- A. expectations move at a fast pace
- B. expecting to move at a fast pace
- C. expectations move with a fast pace
- D. expecting move with the fast pace
- E. No corrections required

Solution :

14. Answer: A

In the sentence, “for taking place” should be replaced with “to take place” as after “allow” we should use “to+V1”.

Other options are grammatically incorrect.

15. Answer: A

This sentence wanted to highlight the hopes or a strong belief that something will happen or be the case. In this context expectation is the right form to use which is only present in option A and C. But in option C, with a fast pace is incorrect, since it cannot move along with the pace, so at should be used here.

Therefore, option A is the correct answer.

Dear Friends, this is the Special Paid PDF which was made by Our Expert Team for especially for IBPS Clerk Prelims 2020. Here you can check the index page & sample questions of this Special Paid PDF. If you are interest then you can use the link given below to buy it. We assure you that this PDF will definitely useful for the aspirants those who are committed to crack the IBPS Clerk Prelims 2020 can use this PDF.

[Click Here to Buy Our Special Paid Bundle PDF for IBPS Clerk Prelims 2020](#)